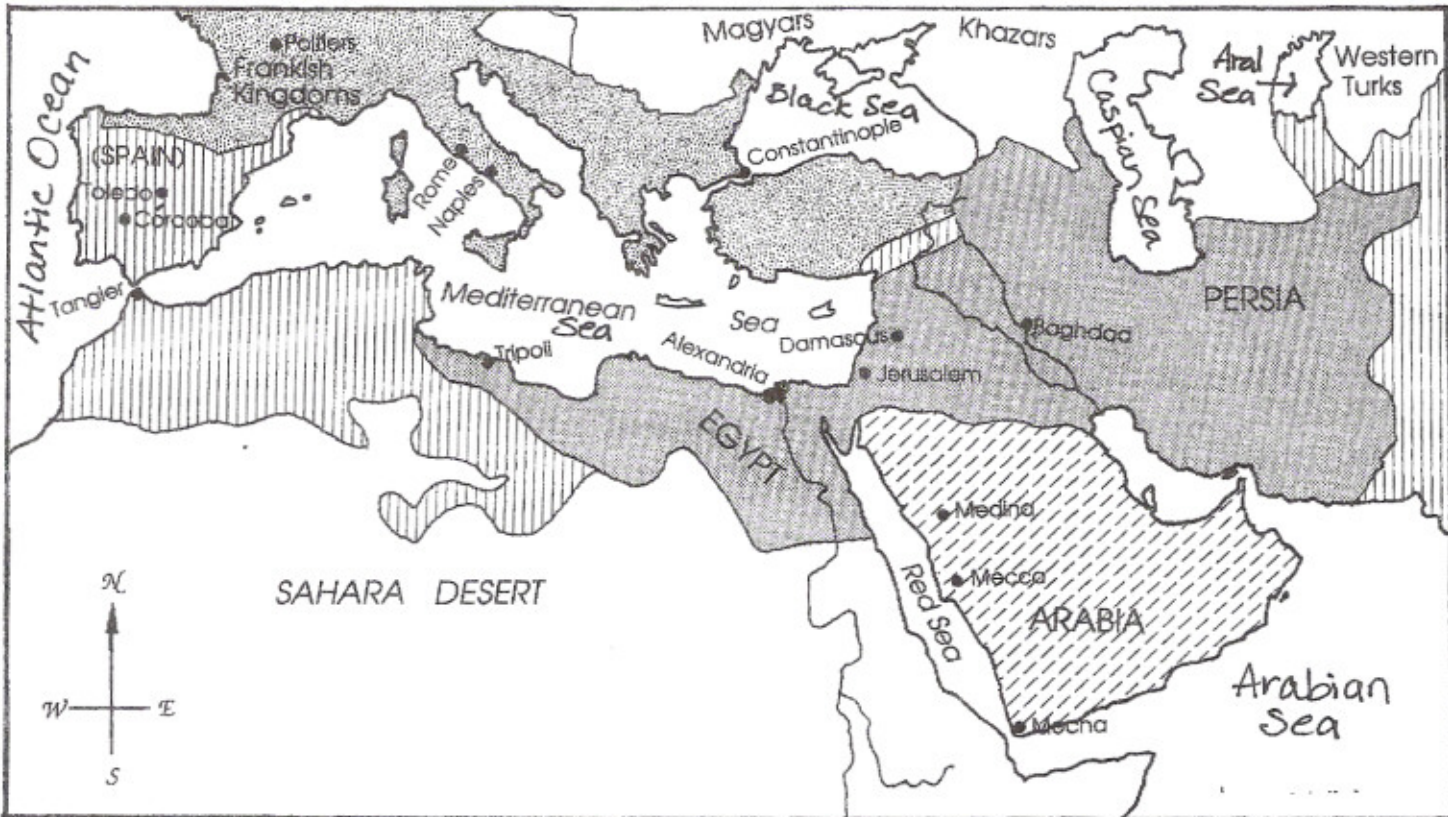






Expansion of Islam to A.D. 750

Name _____

Use this map to answer the questions.



Color your key & your map

Key	
orange → 	Conquests of Mohammed to 632
green → 	Conquests of Orthodox Caliphs (Muslim rulers) to 661
	Conquests of Omayyads to 750
	Christian-held areas 750

Color the Atlantic Ocean & all Seas BLUE after you've colored what's in your key

- Mohammed had conquered most of Arabia by the year _____.
- What Islamic group extended its influence into Persia? _____
- By what year did the Omayyads extend the Islamic influence into Spain? _____
- Place the correct letter in each blank to show if these cities were Christian-held areas (C) or Islamic-held areas (I).

- | | | | | | |
|-------------------|-------|------------|-------|---------------|-------|
| A. Mocha | _____ | F. Tripoli | _____ | K. Alexandria | _____ |
| B. Damascus | _____ | G. Córdoba | _____ | L. Poltiers | _____ |
| C. Rome | _____ | H. Naples | _____ | M. Mecca | _____ |
| D. Baghdad | _____ | I. Medina | _____ | N. Tangier | _____ |
| E. Constantinople | _____ | J. Toledo | _____ | | |